




Determine the amount of money shown.

Answers



1. _____



2. _____



3. _____

4. _____

5. _____



6. _____

7. _____




8. _____

9. _____




10. _____





Determine the amount of money shown.



Answers

1. \$0.95

2. \$0.80

3. \$0.90

4. \$0.99

5. \$0.97

6. \$0.95

7. \$0.98

8. \$0.78

9. \$0.98

10. \$0.77